

Location

Name Haley S.

Class 3B Date 3.8.10

Pre Post

Progression Points

2.25 Determine the approximate north by considering the position of the sun.

2.5 Locate and identify places on maps and diagrams.

2.75 Identify places on a map through compass directions.


3.0 Give travel directions and describe positions using simple compass directions (for example, N for North) and grid references on a street directory.

3.0+ Give directions on a busy map using coordinates and compass directions.

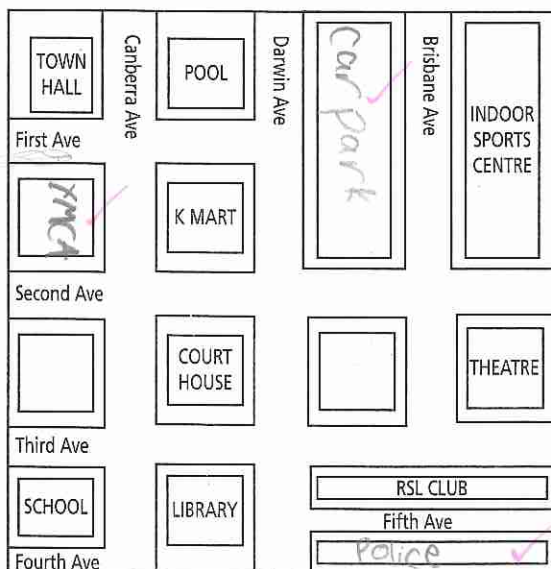
2.25

- 1 Jason sat watching the sun set over the mountains.

Colour the correct arrow to show the direction of north on the picture. Remember that the sun sets in the west.



2.5



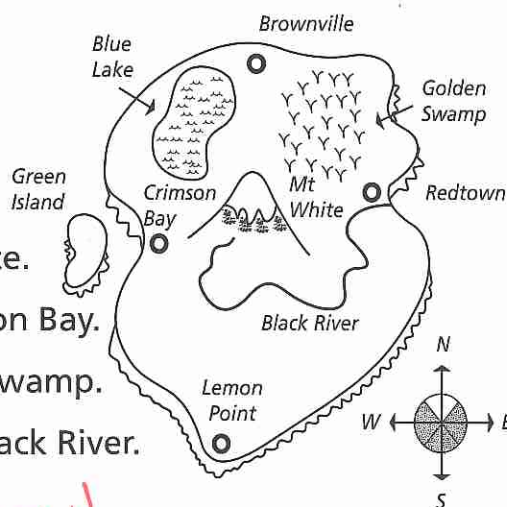
- 2 Write these centres on the map.

- Police:** In **Fifth Ave.** opposite the RSL Club.
- YMCA:** On the corner of **First Ave.** and on the left-hand side of **Canberra Avenue.**
- Car Park:** Runs **parallel** to the Indoor Sports Centre in **Brisbane Avenue.**

2.75

- 3 Use the map to help you write compass points in the gaps below. (north, south, east, west)

- Brownville is north of Mt White.
- Green Island is west of Crimson Bay.
- Blue Lake is west of Golden Swamp.
- Lemon Point is south of the Black River.



Nearly there!
Try again for post test.

Wow!
100% correct!

